

ADMISSIONS

2017

POST GRADUATE

TOTAL NO. OF PAGES - 13

TOTAL MARKS - 100

Permitted Time : 3 Hours

Kindly read the instructions carefully before attempting the questions

To be filled by the student.

CANDIDATE ID :

CANDIDATE NAME :

TEST CENTRE :

AHMEDABAD MUMBAI PUNE NAGPUR BANGALORE

CHENNAI KOLKATA GUWAHATI PATNA LUCKNOW

BHOPAL DELHI JAIPUR HYDERABAD CHANDIGARH

INVIGILATOR'S SIGNATURE

To be filled by the office only.

Blank area for office use.

INSTRUCTIONS TO THE CANDIDATES:

Read these instructions carefully.

1. Write your Name, Candidate ID number and the Examination Center in the space provided on the cover page of this answer book as well as on all the pages of answer book.
 - Make sure that you sign in the space provided on the cover page.
 - No distinctive mark of any sort is to be put anywhere in the answer book.
 - Violation of these instructions or adoption of malpractice in examination hall will lead to disqualification.
 - Please make sure you have signed the registration sheet with invigilator to mark your presence.
2. Write your answers ONLY IN ENGLISH.
3. The question paper is dived in two sections.
 - Section I – Attempt all
 - Section II – Attempt any two
4. Write or draw your answers only in the space provided for each question.
 - Backside of the paper to be used for ROUGH WORK ONLY. The final answer should be provided ONLY in the space marked as “SPACE FOR FINAL ANSWER”.
5. DO NOT REMOVE ANY SHEET form this answer book.
6. Before leaving the examination hall, submit this question – cum – answer paper to the invigilator.

(SECTION - I) QUESTION: 1

Identify the word or message in the drawing ?

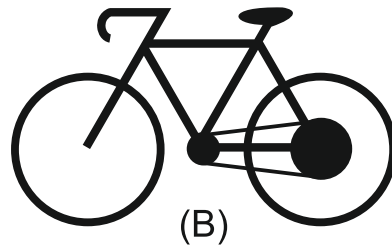
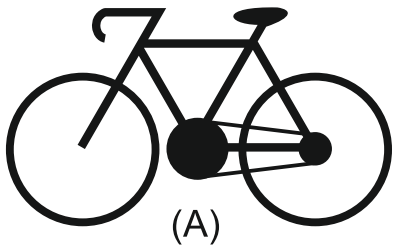


.....

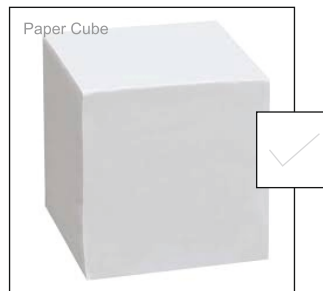

By the given two of the Bicycle, which one will you use for the following ?

1. Uphill

2. Speed



Which object out of the given two will handle more weight before breakage or damage and explain why?



.....
.....
.....
.....
.....
.....

(SECTION - I) QUESTION: 2

MARKS
12

Which object is more comfortable to use out of the given group options ?
Also draw one of the directly relevant human organ using one of the selected object in the given space below.

Group A



Group B




Group C



(SECTION - I) QUESTION: 3

MARKS
4

Given are the steps of cube rotation, arrange them in proper left to right sequence of rotation.



A B C D E

LEFT TO RIGHT

In the given sentence, there are some letters that do not match the main letter fonts, identify and circle the odd fonts that do not belong to the main letter font family. (Refer the example, use a color to circle)

YOUR DRAWING IS
BEAUTIFUL, BECAUSE
YOU LOVE NATURE **E**

Tick mark the correct answers with a pen.

1. Which is a stronger material ?

Aluminum

Iron

2. Which precious metal has a higher melting point ?

Gold

Platinum

3. Which of these vehicles can go faster, if given the same engine ?



4. Which cube will be heavier if of same size ?

Copper

Brass

5. Which fabric is light weight ?

Cotton

Silk

6. Which is a stronger fabric ?

Denim

Satin

7. Which bird can fly higher ?

Sparrow

Peacock

8. What is the common height of house doors ?

7 Feet

6 Feet

9. How much is 1KM ?

1000 Inch

10,000 Cms

10. Which material is used for stronger grip ?

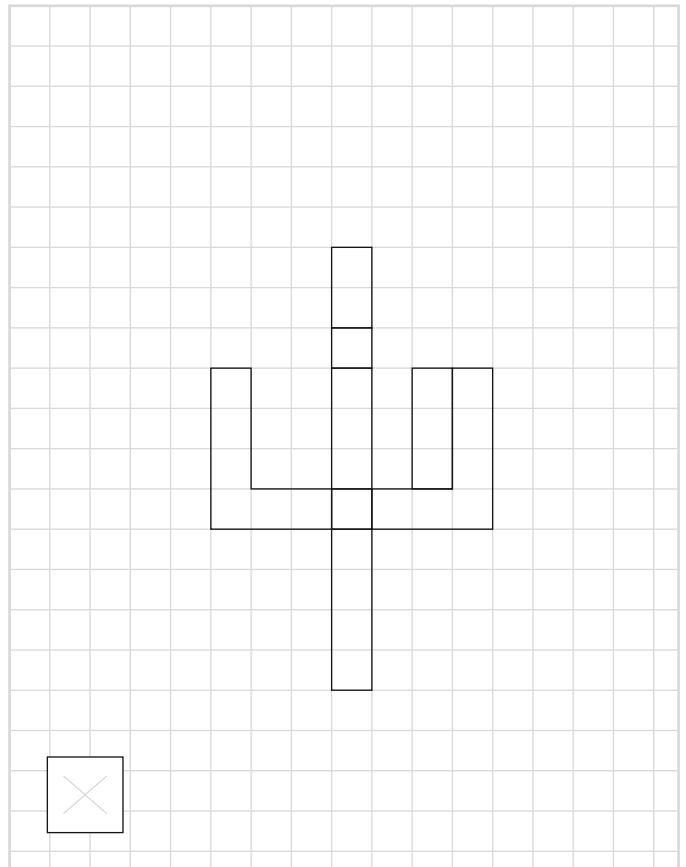
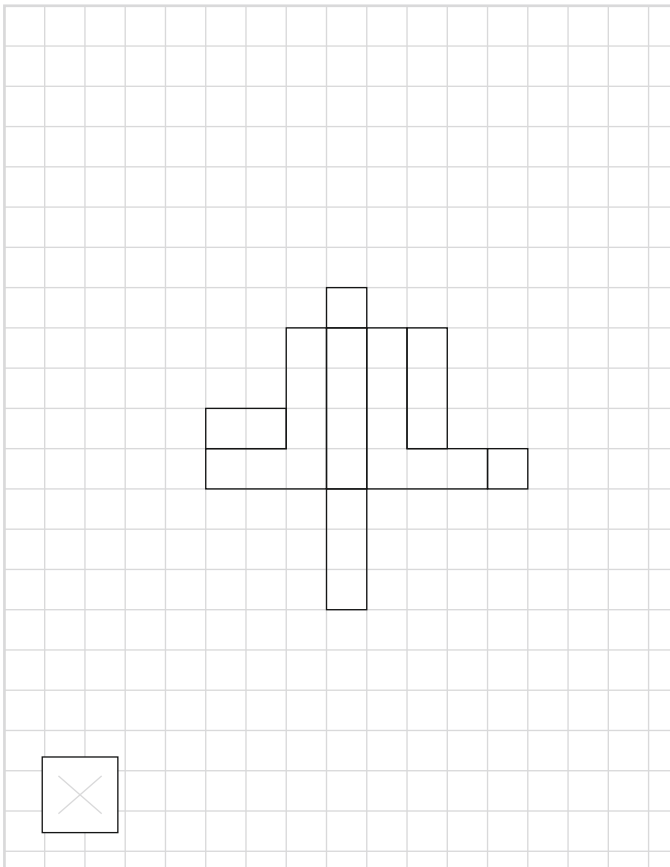

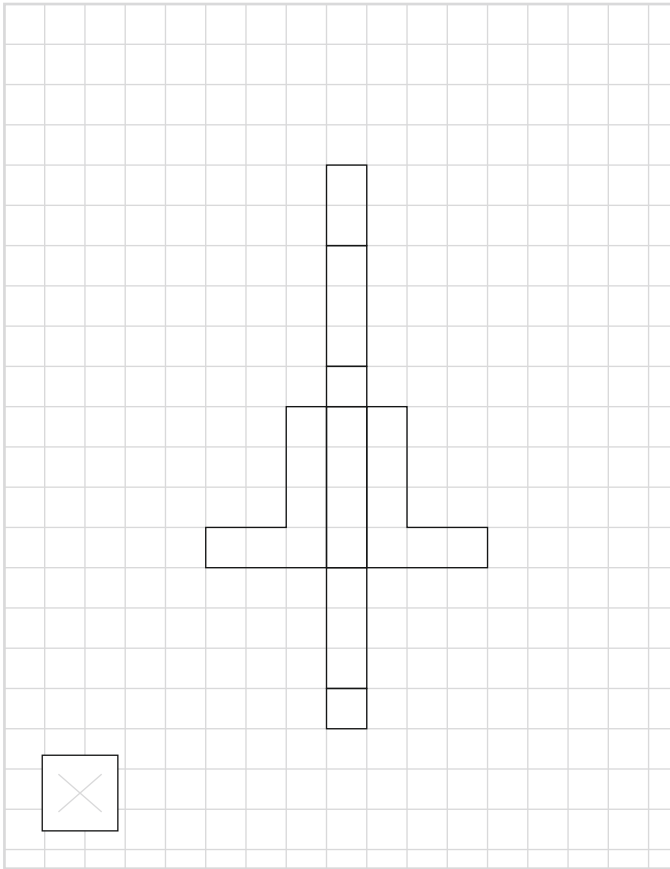
Rubber

Wood


(SECTION - I) QUESTION: 5

MARKS
6

Out of the given open layouts, cross the one which will not form the developed view, and rectify the same layout in the given grid in the next page with a pen.



Drawing area to rectify the selected layout in (Section - I) Question:5
First draw the selected layout and then the corrected one, try multiple options.



SECTION - II (ATTEMPT ANY 2 QUESTIONS)

MARKS
25




(SECTION - II) QUESTION: 1

Develop fonts type which has any one of the following attributes given below :-
(three different fonts drawing are required, all three should have the same attributes, tick mark the one you are developing)

1. Anger

2. Slow

3. Crazy




(SECTION - II) QUESTION: 3

MARKS
25

Illustrate a comic scene showing the environment being affected by THE DEMONETISATION in India and try to explain it in a few words.


(environment meaning everyday livelihoods including all livings)



(SECTION - II) QUESTION: 4

MARKS
25

Given is a perspective grid having a man silhouette in it, now add a table + 2 chairs + a door + 2 windows + a 5 year old child + 2 photo frames & a sofa with scale relation to the given man silhouette.



(SECTION - II) QUESTION: 5

MARKS
25

Visualize a garment for any one situation worn by the silhouette given below and explain it in a few words. (Use pencil colors only)

Mid Day Summer Beach Party



Lok Sabha Member

